

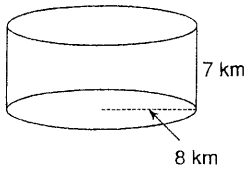
Name _____

Volume of Prisms and Cylinders

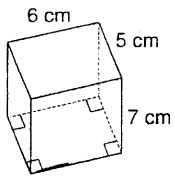
Date _____ Period _____

Find the volume of each figure. Round your answers to the nearest tenth, if necessary.

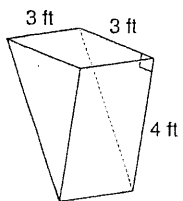
1)

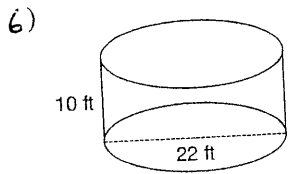
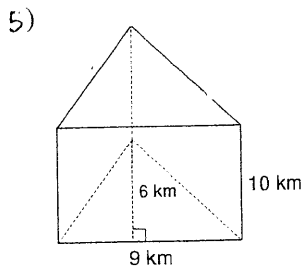
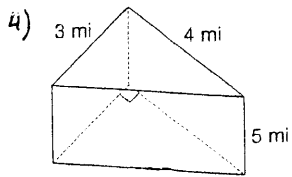


2)



3)





7) A cylinder with a radius of 4 yd and a height of 5 yd.

8) A square prism measuring 6 km along each edge of the base and 5 km tall.